

Zadatak 52. Grafički prikaži skup točaka ravnine zadan jednadžbom:

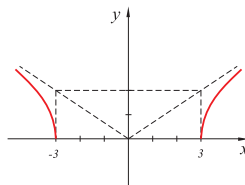
1) $y = \frac{2}{3}\sqrt{x^2 - 9}$;

2) $y = -2\sqrt{x^2 - 1}$;

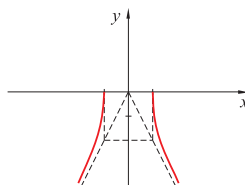
3) $y = \frac{2}{5}\sqrt{x^2 + 25}$;

4) $y = 1 - 3\sqrt{x^2 + 1}$.

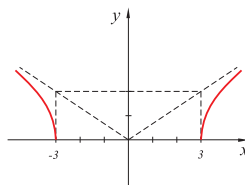
Rješenje. 1)



2)



3)



4)

