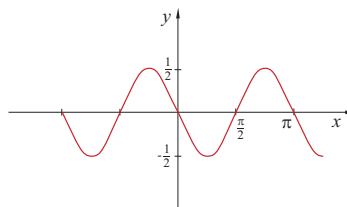
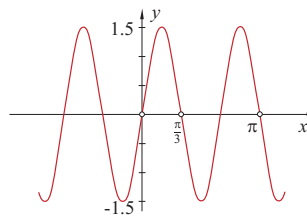


Zadatak 7. Na slikama su grafovi periodičnih funkcija. Koliki je njihov period?

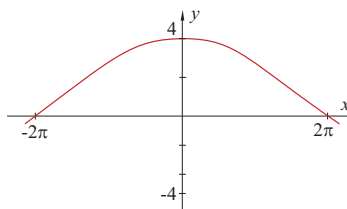
1)



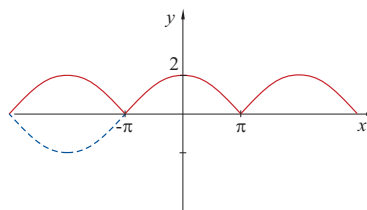
2)



3)



4)



Rješenje. 1) $P = \pi$; 2) $p = \frac{2\pi}{3}$; 3) $P = 8\pi$; 4) $P = 2\pi$.